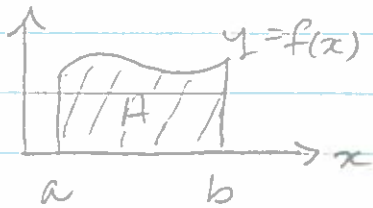


This week:

The Fundamental Theorem of Calculus.
Riemann Sums
Integration by Substitution

Also — Course evaluations. Please do them!

Recall,



$$= \int_a^b f(x) dx = \lim_{n \rightarrow \infty} \sum_{k=1}^n f(x_k) (x_{k+1} - x_k)$$

$$a = x_1 < x_2 < \dots < x_n = b$$

AREA

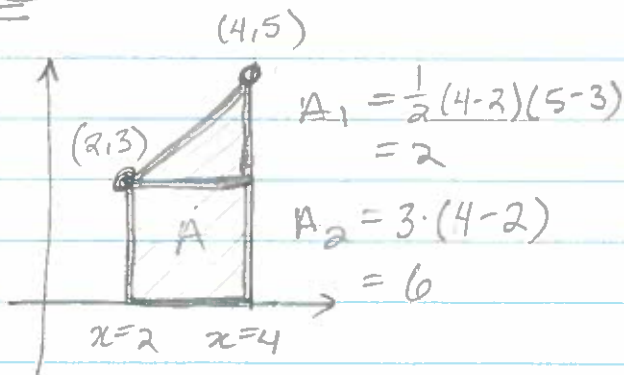
DEFINITE INTEGRAL

RIEMANN SUM

Also, $1 + 2 + \dots + n = \frac{n(n+1)}{2}$

Ex: Find the area under $y = 1 + x$ between $x = 2$ and $x = 4$
In three ways: ① Geometrically.
② By integration.
③ As a Riemann sum.

Solu ①



Solu ②

$$A = \int_2^4 1 + x dx$$

$$F(x) = x + \frac{1}{2}x^2 \Rightarrow F'(x) = 1 + 2x$$

$$A = \left[4 + \frac{1}{2} \cdot 4^2 \right] - \left[2 + \frac{1}{2} \cdot 2^2 \right] = 4 + 8 - 2 - 2$$

Thus, $A = 6 + 2 = 8$.

Ex (cont)Solu ③ # Divide $[2, 4]$ into n equally sized parts

$$x_0 = 2$$

$$x_1 = 2 + \frac{4-2}{n} = 2 + \frac{2}{n}$$

$$x_2 = 2 + \frac{2}{n} + \frac{2}{n}$$

$$x_3 = 2 + \frac{2}{n} + \frac{2}{n} + \frac{2}{n}$$



$$2 + k\left(\frac{2}{n}\right) \quad 2 + (k+1)\left(\frac{2}{n}\right)$$

$$x_n = 2 + n\left(\frac{2}{n}\right) = 2 + 2 = 4.$$

Write out the Riemann sum.

$$A = \lim_{n \rightarrow \infty} \sum_{k=1}^n f(x_k) [x_{k+1} - x_k]$$

$$= \lim_{n \rightarrow \infty} \sum_{k=1}^n f\left(2 + k\frac{2}{n}\right) \left[\left(2 + (k+1)\frac{2}{n}\right) - \left(2 + k\frac{2}{n}\right) \right]$$

$$= \lim_{n \rightarrow \infty} \sum_{k=1}^n f\left(2 + k\frac{2}{n}\right) \cdot \left(\frac{2}{n}\right)$$

$$= \lim_{n \rightarrow \infty} \frac{2}{n} \sum_{k=1}^n f\left(2 + k\frac{2}{n}\right) = \lim_{n \rightarrow \infty} \frac{2}{n} \sum_{k=1}^n 1 + \left(2 + k\frac{2}{n}\right)$$

3

Ex (cont)

Evaluate the Riemann sum

$$A = \lim_{n \rightarrow \infty} \frac{2}{n} \sum_{k=1}^n 1 + \left(2 + k \left(\frac{2}{n}\right)\right)$$

$$= \lim_{n \rightarrow \infty} \frac{2}{n} \sum_{k=1}^n 3 + k \left(\frac{2}{n}\right)$$

$$= \lim_{n \rightarrow \infty} \left[\frac{2}{n} \sum_{k=1}^n 3 + \frac{4}{n^2} \sum_{k=1}^n k \right]$$

$$= \lim_{n \rightarrow \infty} \frac{2}{n} \cdot (3n) + \frac{4}{n^2} \cdot \frac{n(n+1)}{2}$$

$$= \lim_{n \rightarrow \infty} 6 + 2 \frac{n^2 + n}{n^2} = 6 + 2 = 8.$$

Summary:

Divide interval I_n to n equally sized parts

Write out the Riemann sum (Simplify!)

Evaluate Riemann sum.

We need another summation formula:

$$1^2 + 2^2 + 3^2 + \dots + n^2 = \frac{n(n+1)(2n+1)}{6}$$

We check that this always holds.

$$1^2 = \frac{1 \cdot (1+1) \cdot (2 \cdot 1 + 1)}{6} = \frac{1 \cdot 2 \cdot 3}{6} = 1.$$

Q.E.D.

Suppose it holds for k . That is,

$$\sum_{i=1}^k i^2 = \frac{k(k+1)(2k+1)}{6}$$

We get

$$(k+1)^2 + \sum_{i=1}^k i^2$$

$$= (k+1)^2 + \frac{k(k+1)(2k+1)}{6}$$

$$= (k+1) \left[(k+1) + \frac{k(2k+1)}{6} \right]$$

$$= (k+1) \left[\frac{6(k+1)}{6} + \frac{k(2k+1)}{6} \right]$$

$$= (k+1) \left[\frac{6k+6+2k^2+k}{6} \right] = \frac{(k+1)(k+2)(2(k+1)+1)}{6}$$

Q.E.D.

Ex: Use a Riemann sum to find the area under $y = x^2$ from $x = 5$ to $x = 8$.

Split the interval in to n equal parts.

$$x_0 = 5 \quad x_1 = 5 + \frac{8-5}{n} = 5 + \frac{3}{n} \quad x_2 = 5 + 2\left(\frac{3}{n}\right)$$

Write out the Riemann sum

$$A = \lim_{n \rightarrow \infty} \sum_{k=1}^n f(x_k)(x_{k+1} - x_k)$$

$$= \lim_{n \rightarrow \infty} \sum_{k=1}^n f\left(5 + k\left(\frac{3}{n}\right)\right) \left[\frac{3}{n}\right]$$

$$= \lim_{n \rightarrow \infty} \left[\frac{3}{n}\right] \sum_{k=1}^n \left(5 + k\left(\frac{3}{n}\right)\right)^2$$

$$= \lim_{n \rightarrow \infty} \left[\frac{3}{n}\right] \sum_{k=1}^n 25 + 10 \cdot k\left(\frac{3}{n}\right) + k^2\left(\frac{9}{n^2}\right)$$

$$= \lim_{n \rightarrow \infty} \frac{75}{n} \sum_{k=1}^n 1 + \frac{90}{n^2} \sum_{k=1}^n k + \frac{27}{n^3} \sum_{k=1}^n k^2$$

$$= \lim_{n \rightarrow \infty} \frac{75}{n} \cdot n + \frac{90}{n^2} \cdot \frac{n(n+1)}{2} + \frac{27}{n^3} \cdot \frac{n(n+1)(2n+1)}{6}$$

Evaluate the Riemann sum

$$A = 75 + 45 + 9 = 129$$

Proving the FTC

Thm: If f is continuous and

$$A(x) = \int_0^x f(t) dt$$

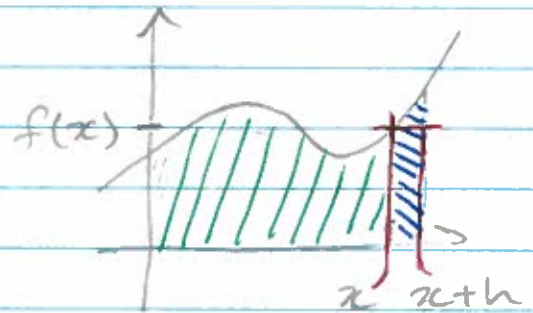
then $A'(x) = f(x)$.

Pf:

$$A'(x) = \lim_{h \rightarrow 0} \frac{A(x+h) - A(x)}{h}$$

$$\approx \lim_{h \rightarrow 0} \frac{f(x) \cdot h}{h}$$

$$= f(x)$$



NB: The area of the blue region is approximately:

$$f(x) \cdot ((x+h) - x) \\ = f(x) \cdot h$$

The Fundamental Theorem

If $f(x)$ is continuous and $F'(x) = f(x)$
then

$$\int_a^b f(x) dx = F(b) - F(a)$$

Pf:

Define $A(x) = \int_a^x f(t) dt$

We have $A'(x) = f(x)$ and $F'(x) = f(x)$.

Thus $A(x) = F(x) + C$.

$$\int_a^b f(x) dx = \int_a^b f(t) dt$$

$$= A(b)$$

$$= A(b) - A(a) \quad \# \quad A(a) = 0$$

$$= [F(b) + C] - [F(a) + C]$$

$$= F(b) - F(a)$$

Thm: If $a < c < b$ then

$$\int_a^b f(x) dx = \int_a^c f(x) dx + \int_c^b f(x) dx$$

pf: By the Fundamental Theorem

$$\int_a^b f(x) dx = F(b) - F(a)$$

and

$$\begin{aligned} & \int_a^c f(x) dx + \int_c^b f(x) dx \\ &= [F(c) - F(a)] + [F(b) - F(c)] \\ &= F(b) - F(a) \end{aligned}$$

Summary of Integrals (o) $\int_a^b f(x) dx$ is SIGNED area

$$(1) \int_a^b k \cdot f(x) dx = k \int_a^b f(x) dx$$

$$(2) \int_a^b [f(x) + g(x)] dx = \int_a^b f(x) dx + \int_a^b g(x) dx$$

$$(3) \int_a^b f(x) dx = \int_a^c f(x) dx + \int_c^b f(x) dx$$

Integration by Substitution.

"How do we integrate $\int 2x e^{x^2} dx$?"

Use the chain rule backwards!

Recall, $\frac{d}{dx} f(y) = f'(y) \frac{dy}{dx}$.

Ex: $\int 2x e^{x^2} dx$

$$= \int \frac{dy}{dx} \cdot e^y dx$$

$$= \int e^y dy$$

$$= e^y + C = e^{x^2} + C.$$

$$\begin{array}{l} \text{Let } y = x^2 \\ \frac{dy}{dx} = 2x \end{array}$$

Ex: $\int \frac{3x^2}{1+x^3} dx$

$$= \int \frac{\frac{dy}{dx}}{1+y} dx$$

$$= \int \frac{1}{1+y} dy$$

$$= \ln |1+y| + C$$

$$= \ln |1+x^3| + C$$

$$\begin{array}{l} \text{Let } y = x^3 \\ \frac{dy}{dx} = 3x^2 \end{array}$$

Ex: $\int \frac{1}{\sqrt{x}} \sin(\sqrt{x}) dx$

$$= \int \frac{2}{2\sqrt{x}} \sin(\sqrt{x}) dx \quad \# \text{ introduce the terms needed to complete } dy$$

$$= 2 \int \frac{1}{2\sqrt{x}} \sin(\sqrt{x}) dx$$

$$= 2 \int \frac{dy}{dx} \sin(y) dx$$

let $y = \sqrt{x}$
$\frac{dy}{dx} = \frac{1}{2\sqrt{x}}$

$$= 2 \int \sin(y) dy$$

$$= 2 [-\cos(y)] + C$$

$$= -2 \cos(\sqrt{x}) + C$$

Notation: we write

$$dy = \frac{dy}{dx} \cdot dx$$

and make substitutions accordingly.

Ex: $\int x \cos(x^2) dx$

$u = x^2$
$du = 2x dx$

$$= \frac{1}{2} \int 2x \cos(x^2) dx$$

$$= \frac{1}{2} \int \cos(u) du = \frac{1}{2} \sin(u) + C = \frac{1}{2} \sin(x^2) + C.$$